



Determine the amount of money shown.



Answers

1. \_\_\_\_\_

2. \_\_\_\_\_

3. \_\_\_\_\_

4. \_\_\_\_\_

5. \_\_\_\_\_

6. \_\_\_\_\_

7. \_\_\_\_\_

8. \_\_\_\_\_

9. \_\_\_\_\_

10. \_\_\_\_\_



Determine the amount of money shown.



Answers

1. \$0.91

2. \$0.96

3. \$0.83

4. \$0.91

5. \$0.92

6. \$0.70

7. \$0.95


8. \$0.98

9. \$0.97

10. \$0.91



Determine the amount of money shown.



Answers

1. \_\_\_\_\_

2. \_\_\_\_\_

3. \_\_\_\_\_

4. \_\_\_\_\_

5. \_\_\_\_\_

6. \_\_\_\_\_

7. \_\_\_\_\_

8. \_\_\_\_\_

9. \_\_\_\_\_

10. \_\_\_\_\_



Determine the amount of money shown.



Answers

1. \$0.83

2. \$0.97

3. \$0.33

4. \$0.95

5. \$0.96

6. \$0.97

7. \$0.82


8. \$0.74

9. \$0.92

10. \$0.95



Determine the amount of money shown.



Answers

1. \_\_\_\_\_

2. \_\_\_\_\_

3. \_\_\_\_\_

4. \_\_\_\_\_

5. \_\_\_\_\_

6. \_\_\_\_\_

7. \_\_\_\_\_


8. \_\_\_\_\_

9. \_\_\_\_\_

10. \_\_\_\_\_



Determine the amount of money shown.



Answers

1. \$0.90

2. \$0.97

3. \$0.98

4. \$0.46

5. \$0.65

6. \$0.75

7. \$0.96

8. \$0.95


9. \$0.89

10. \$0.96





Determine the amount of money shown.



Answers

1. \_\_\_\_\_

2. \_\_\_\_\_

3. \_\_\_\_\_

4. \_\_\_\_\_

5. \_\_\_\_\_

6. \_\_\_\_\_

7. \_\_\_\_\_



8. \_\_\_\_\_

9. \_\_\_\_\_

10. \_\_\_\_\_



Determine the amount of money shown.



Answers

1. \$0.95

2. \$0.80

3. \$0.99

4. \$0.91

5. \$0.96

6. \$0.96

7. \$0.60

8. \$0.68



9. \$0.95

10. \$0.75





Determine the amount of money shown.



Answers

1. \_\_\_\_\_

2. \_\_\_\_\_

3. \_\_\_\_\_

4. \_\_\_\_\_

5. \_\_\_\_\_

6. \_\_\_\_\_

7. \_\_\_\_\_



8. \_\_\_\_\_

9. \_\_\_\_\_

10. \_\_\_\_\_



Determine the amount of money shown.



Answers

1. \$0.99

2. \$0.87

3. \$0.99

4. \$0.85

5. \$0.96

6. \$0.84

7. \$0.76

8. \$0.99

9. \$0.82

10. \$0.95



Determine the amount of money shown.

Answers



1. \_\_\_\_\_



2. \_\_\_\_\_




3. \_\_\_\_\_



4. \_\_\_\_\_



5. \_\_\_\_\_



6. \_\_\_\_\_



7. \_\_\_\_\_



8. \_\_\_\_\_




9. \_\_\_\_\_



10. \_\_\_\_\_



Determine the amount of money shown.



Answers

1. \$0.91

2. \$0.95

3. \$0.96

4. \$0.90

5. \$0.99

6. \$0.82

7. \$0.97



8. \$0.95

9. \$0.92

10. \$0.98



Determine the amount of money shown.



Answers

1. \_\_\_\_\_

2. \_\_\_\_\_

3. \_\_\_\_\_

4. \_\_\_\_\_

5. \_\_\_\_\_

6. \_\_\_\_\_

7. \_\_\_\_\_

8. \_\_\_\_\_



9. \_\_\_\_\_

10. \_\_\_\_\_





Determine the amount of money shown.



Answers

1. \$0.68

2. \$0.92

3. \$0.88

4. \$0.83

5. \$0.64

6. \$0.88

7. \$0.95

8. \$0.98

9. \$0.99

10. \$0.92





Determine the amount of money shown.



Answers

1. \_\_\_\_\_

2. \_\_\_\_\_

3. \_\_\_\_\_

4. \_\_\_\_\_

5. \_\_\_\_\_

6. \_\_\_\_\_

7. \_\_\_\_\_

8. \_\_\_\_\_

9. \_\_\_\_\_

10. \_\_\_\_\_



Determine the amount of money shown.



Answers

1. \$0.95

2. \$0.98

3. \$0.75

4. \$0.96

5. \$0.96

6. \$0.95

7. \$0.83

8. \$0.95

9. \$0.95

10. \$0.93



Determine the amount of money shown.

Answers



1. \_\_\_\_\_



2. \_\_\_\_\_



3. \_\_\_\_\_



4. \_\_\_\_\_



5. \_\_\_\_\_



6. \_\_\_\_\_



7. \_\_\_\_\_



8. \_\_\_\_\_



9. \_\_\_\_\_



10. \_\_\_\_\_



Determine the amount of money shown.



Answers

1. \$0.95

2. \$0.74

3. \$0.91

4. \$0.96

5. \$0.99

6. \$0.88

7. \$0.95

8. \$0.96

9. \$0.62

10. \$0.95



Determine the amount of money shown.

Answers



1. \_\_\_\_\_




2. \_\_\_\_\_



3. \_\_\_\_\_



4. \_\_\_\_\_



5. \_\_\_\_\_




6. \_\_\_\_\_



7. \_\_\_\_\_



8. \_\_\_\_\_



9. \_\_\_\_\_





10. \_\_\_\_\_





Determine the amount of money shown.



Answers

1. \$0.98

2. \$0.95

3. \$0.91

4. \$0.97

5. \$0.71

6. \$0.84

7. \$0.95

8. \$0.94

9. \$0.76

10. \$0.94